

Summer

Dr. Virendra Swarup Education Centre,
Jajmau, Kanpur
Holiday Homework



General Instructions-

Class I

- Do all the worksheets given.
- All the work should be neatly done under the supervision of the parents.
- Handover the holiday homework to the class teacher in a labelled transparent folder, when the school reopens.
- The holiday homework carries marks hence, submit the homework neatly. No marks will be given if the holiday homework will not be submitted.

Vacation

Learn the poem for the choral recitation.



Homework-

- **Grammar Magic book-** Do pages 40, 41, 66, 69, 72, and 79 .
 - **Time to write book-** Do pages 3 to 30
 - **Summore book-** Do pages 11, 15, 20, 21, 23, 25, 26, 27, 28, 29, 30, 35, 74
- Revise the work done till date and prepare well for **JULY TEST**.



Enjoy your holidays!



PROJECT WORK

SCIENCE: -

Clothes we wear in different seasons wheel

- Make a rotating wheel showing:
- Summer - Cotton clothes
- Winter - Woollen clothes
- Rainy - Raincoat



MATHS: -

Ordinal Number Ladder

Draw a ladder with steps from 1st to 10th.

Paste a cartoon climbing the ladder.

Write:

“The cat is on the 4th step.”

ENGLISH: -

Make your travel diary. Paste pictures of the places you visited and what you did and learnt. (10 Pages)

SOCIAL STUDIES: -

Be Going To - Home Vocabulary

1. Match the words to the pictures:

- 1. Curtains •
- 2. Fence •
- 3. Grass •
- 4. Roof •
- 5. Glass •
- 6. Rugs •
- 7. Garage •
- 8. Furniture •



2. Word Search: Find and circle the words:

C	U	R	T	A	I	N	S	T	R	E
F	R	O	O	F	G	L	A	S	S	F
E	G	F	E	N	C	E	M	N	B	G
R	A	G	R	A	S	S	I	K	H	A
T	R	U	G	S	O	P	Q	P	R	R
A	E	G	A	R	A	G	E	R	I	D
I	F	U	R	N	I	T	U	R	E	N
N	Z	X	C	V	B	N	M	L	K	J



Class: I /Sec: _____

English

Date: _____

Name: _____


Roll No. _____

Q1. Write the singular or plural of the following picture-













Q2. Write the opposites of the following-

1. day - _____

3. up - _____


5. sit - _____

2. white - _____

4. new - _____

6. happy - _____

Q3. Fill in the blanks with position words-



1. The cat is _____ the table.

2. The pen is _____ the table.

3. The umbrella is _____ the bucket.

4. The ball is _____ the table.

5. The book is _____ the table.

Q4. Write two rhyming words of the following –

1. wool - _____
2. mask - _____
3. week - _____
4. dream - _____
5. dark - _____
6. wood - _____


Q5. Unscramble the letters –

- | | |
|----------------------|----------------------|
| 1. UFINROM - _____ | 5. PEALSNAT - _____ |
| 2. ATRFEONON - _____ | 6. FVAUOIRET - _____ |
| 3. SMUEMR - _____ | 7. ECTIXDE - _____ |
| 4. VCITAANO - _____ | 8. BUETAFILU - _____ |

Q6. Fill in the blanks with 'is', 'am' or 'are' -

- a) He _____ my best friend.
- b) The boys _____ in the garden.
- c) John and Charlie _____ policemen.
- d) I _____ from Punjab.
- e) The dog _____ in the kennel.

Q7. Colour the "vowels" RED and "consonants" GREEN-



Q8. Fill in the blanks with 'a', 'an' or 'the'-

- a) There is _____ box on the table.
- b) _____ egg is kept in the basket.
- c) _____ Red Fort is in Delhi.
- e) _____ Earth is _____ blue planet.
- f) _____ plates are on the dining table.
- g) She is always smiling and kind to _____ students.
- f) I want _____ burger.
- g) Teacher is giving _____ important paper to the class.
- h) _____ sun is shining brightly in the sky.

Q9. Make sentences with-

a) small-

b) family –

c) beach –

d) clothes –

Q11. Fill in the blocks with the names of all the vehicles also colour the pictures-

10

6

7

3

5

8

9

3

2

1

6

1

7

2

1

7

8

10

9

4

4

5

Dr. Virendra Swarup Education Centre, Jajmau, Kanpur

Class: I /Sec: _____

Maths (2026-27)

Date: _____

Name: _____

Roll No. _____

Q.1. Write the numerals-

a) One hundred thirty five - _____

b) Ninety eight - _____

c) Two hundred forty five - _____

d) Three hundred - _____

e) Two hundred ninety nine - _____

Q.2. Write the number names-

a) 230 - _____

b) 305 - _____

c) 312 - _____

d) 200 - _____

e) 190 - _____

Q.3. Fill in the blanks-

a) 156 _____ 158 _____ 160 _____

b) _____ 296 _____ 298 _____ 300 _____

c) 221 _____ 223 _____ 224 _____

d) 167 _____ _____ 170 _____ 172

Q.4. Put the correct sign (>, < or =)-

a) 112 _____ 192

e) 177 _____ 77

b) 240 _____ 110

f) 100 _____ 101

c) 100 _____ 100

g) 296 _____ 223

d) 72 _____ 25

h) 115 _____ 111

Q.5. Addition-

a) T O

$$\begin{array}{r} 45 \\ + 29 \\ \hline \\ \hline \end{array}$$

b) T O

$$\begin{array}{r} 91 \\ + 35 \\ \hline \\ \hline \end{array}$$

c) T O

$$\begin{array}{r} 78 \\ + 26 \\ \hline \\ \hline \end{array}$$

d) T O

$$\begin{array}{r} 43 \\ + 21 \\ \hline \\ \hline \end{array}$$

e) T O

$$\begin{array}{r} 52 \\ + 11 \\ \hline \\ \hline \end{array}$$

f) T O

$$\begin{array}{r} 69 \\ + 37 \\ \hline \\ \hline \end{array}$$

g) T O

$$\begin{array}{r} 70 \\ + 18 \\ \hline \\ \hline \end{array}$$

h) T O

$$\begin{array}{r} 22 \\ + 19 \\ \hline \\ \hline \end{array}$$

i) T O

$$\begin{array}{r} 97 \\ + 61 \\ \hline \\ \hline \end{array}$$

Q.6. What comes before , after and between-

a) 185 _____

e) _____ 199

b) _____ 110

f) 355 _____

c) 165 _____ 167

g) 262 _____ 264

d) 200 _____

h) _____ 287

Q.7. Linear addition-

a) $10 + 4 =$ _____

d) $25 + 3 =$ _____

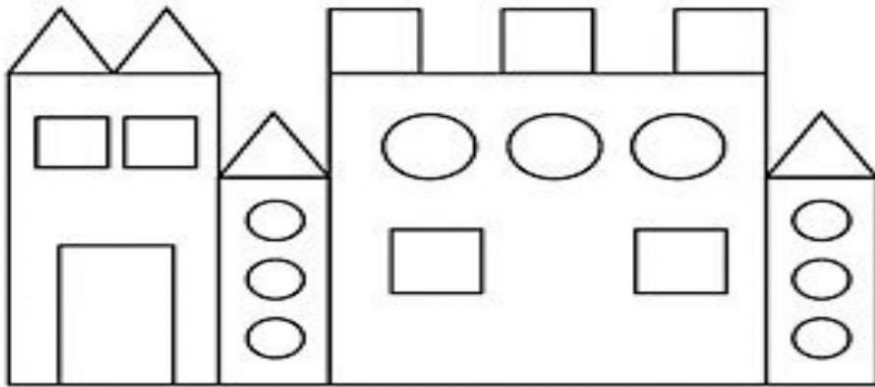
b) $15 + 7 =$ _____

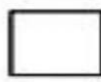
e) $14 + 9 =$ _____


c) $8 + 8 =$ _____


f) $29 + 0 =$ _____


Q.8. Count and write the number of each shape below-




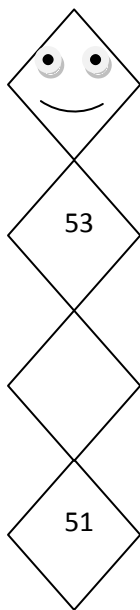
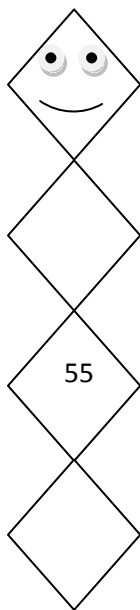
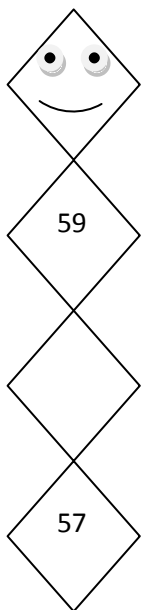
 = _____

 = _____

 = _____

 = _____

Q.9. Write backward counting-



Q.10. Choose and colour the correct answer-

$$2 \times 8$$

$$3 \times 8$$

$$4 \times 9$$

12	16	9
----	----	---

24	30	11
----	----	----

21	36	10
----	----	----

Q.11. Choose which is biggest and smallest in number and colour them-

Color the group that has **more**.



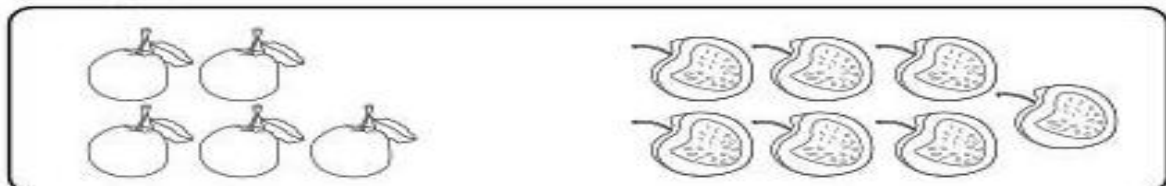
Color the group that has **less**.




Color the group that has **more**.



Color the group that has **less**.



Q.12. Fill in the blanks with skip counting-

	2	4			10
22	20		16		12
	26			32	34
46			40		36
48			54		58
70			64		60

डा. वीरिन्द्र स्वरूप एजुकेशन सेंटर , जाजमऊ
ग्रीष्मकालीन गृहकार्य (2026-27)
विषय-हिंदी

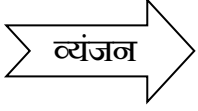
कक्षा -I

दिनांक- _____

नाम - _____

रोल नंबर- _____

1. रिक्त स्थान की पूर्ति कीजिए-



क	—	ग	—	ङ
—	छ	—	झ	ञ
—	ठ	ड	—	ण
त	थ	—	ध	—
प	—	ब	भ	—
य	र	—	—	
श	—	स	—	

2. दिए गए वर्णों को जोड़कर शब्द बनाइए-

क) अ + ना + र = _____

ख) म + छ + ली = _____

ग) पी + प + ल = _____

घ) कि + सा + न = _____

ड.) के + ला = _____

च) टि + क + ट = _____

छ) ज + ले + बी = _____

ज) बा + जा + र = _____

3. नीचे दिए गए प्रश्नों के उत्तर लिखिए-

1 -दो पीले रंग के फूल = क) _____

ख) _____




2 -दो लाल रंग के फल = क) _____

ख) _____

3 -कीचड़ में खिलने वाला फूल = _____

4 -काँटों में खिलने वाला फूल = _____

4. दिए गए चित्र में फूलों के नाम लिखें और रंग भरिए-



5. दो लाल रंग के फलों के नाम

क) _____

ख) _____

6. दो हरे रंग के सब्जियों के नाम

क) _____

ख) _____

7. दो पीले रंग के फलों के नाम

क) _____

ख) _____

8. दो सफेद रंग की सब्जियों के नाम

क) _____

ख) _____

9. छीलकर खाने वाले फलों के नाम

क) _____

ख) _____

10. दो गर्मी के मौसम के फलों के नाम

क) _____

ख) _____

11. दो पत्तेदार सब्जियों के नाम

क) _____

ख) _____

12. अनेक बीज वाले फल का नाम

क) _____

ख) _____


13. सलाद में खाई जाने वाली सब्जियों के नाम

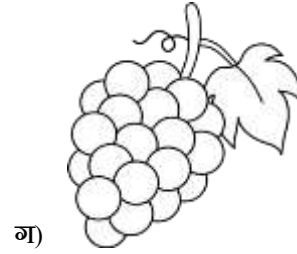
क) _____

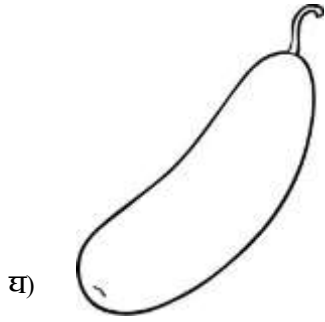
ख) _____

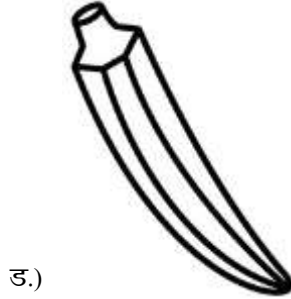
14. दिए गए चित्रों में फलों और सब्जियों के नाम लिखिए और उनमें रंग भरिए-













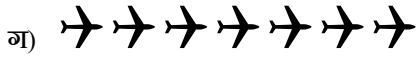
15. दिए गए चित्र को गिनकर हिंदी अंक तथा शब्द में लिखिए-



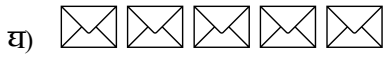
= अंक _____ शब्द _____



= _____



= _____



= _____



= _____

16. रंग भरिए-

