


**Dr. Virendra Swarup Education Centre, Jajmau, Kanpur**

**WINTER HOLIDAY HOMEWORK**

**CLASS 1**



**General Instructions-**

Do all the worksheets given.

- All the work should be neatly done under the supervision of the parents.

- Handover the holiday homework to the class teacher in a labelled transparent folder, when the school reopens.

- The holiday homework carries marks hence, submit the homework neatly. No marks will be given if the holiday homework will not be submitted.

**Homework-**

- **Grammar Magic book-** Do pages 23, 24, 26, 27, 29, 30, 32, 33,38, 39, 40, 41,55, 60, 65, 66, 69, 71, 72, 79 and 80.

- **Time to write book** – Do pages 35 to 64

- **Mental mathbook-**Do pages – 23, 25, 62, 63, 68, 73, 74, 75, 76, 77, 88, 90, 91, 92, 93, 96, 97

- Revise the work done till date and prepare well for FINAL EXAMINATION

***Enjoy your holidays!***

**Class: I/ Sec:\_\_\_**

**English**

**Date: \_\_\_\_\_**

**Roll no. \_\_\_\_**

**Name:\_\_\_\_\_**

---

**Q.1.Underline the nouns in the given sentences-**

- a) My father is a doctor.
- b) The children are playing in the garden.
- c) Monkeys are jumping on the trees.
- d) The box is empty.
- e) These flowers are beautiful.
- f) Delhi is a big city.

**Q.2.Arrange the words into meaningful sentences-**

- a) always mom up early my gets

---

- b) for am never school I late

---

- c) happy is weekends Peter at always

---

- d) Hina to goes library the sometimes

---

- e) village to usually Sunday on we go our

---

**Q.3.Rewrite the sentences using capital letters, full stop and question mark-**

- a) mr Sharma has a pet dog

---

- b) this is my mom and dad.

---

- c) what is Jerry's favourite animal

---

- d) Sarah and tina are sick today.

---

e) i can see two lions and one zebra.

---

f) berlin is the capital of germany.

---

**Q.4. Colour the doing words in each group-**

a)	face	hands	legs	run
b)	skip	rope	rice	wheat
c)	drive	water	ocean	sea
d)	turtle	crawl	ant	mouse
e)	sit	chair	table	couch
f)	sky	tree	leaves	sing

**Q.5. Fill in the blanks with was/were-**

a) I \_\_\_\_\_ feeling cold.

b) The boys \_\_\_\_\_ very hungry.

c) The dishes \_\_\_\_\_ broken.

d) Ann \_\_\_\_\_ small but Sam and Dany \_\_\_\_\_ much bigger.

e) They \_\_\_\_\_ very glad to be home.

**Q.6. Write two rhyming words of the following –**

1. wool - \_\_\_\_\_

2. mask - \_\_\_\_\_

3. week - \_\_\_\_\_

4. cream - \_\_\_\_\_

5. park - \_\_\_\_\_

**Q.7. Fill in the blanks with the opposite gender of the words given in the bracket-**

a) The \_\_\_\_\_ is serving the food. (waiter)

b) The \_\_\_\_\_ is hunting for it's cubs. ( tiger)

c) The \_\_\_\_\_ is swimming in the pond. ( duck )

d) My \_\_\_\_\_ stood first in the class. ( niece )

e) The \_\_\_\_\_ is riding on the horse. ( princess)

**Q.8. Make sentences with-**

a) small- \_\_\_\_\_

b) family - \_\_\_\_\_

c) beach - \_\_\_\_\_

d) clothes - \_\_\_\_\_

e) favourite - \_\_\_\_\_

**Q.9. Rewrite these sentences using short forms-**

a) He is my uncle.

\_\_\_\_\_

b) We are coming to the class.

\_\_\_\_\_


c) You are a good girl.

\_\_\_\_\_


d) It is a nice day.

\_\_\_\_\_

**Q.10. Look at this picture and write few lines to describe the given picture-**



Q.11. Picture sentences ( write two lines about the picture, one is done for you-



1. Mira and Tony are cooking together. \_\_\_\_\_

2. \_\_\_\_\_



1. \_\_\_\_\_

2. \_\_\_\_\_



1. \_\_\_\_\_

2. \_\_\_\_\_



1. \_\_\_\_\_

2. \_\_\_\_\_

**Dr. Virendra Swarup Education Centre, Jajmau, Kanpur**  
**Maths(2025-26)**

**Class: I /Sec:** \_\_\_\_\_

**Date:** \_\_\_\_\_

**Name:** \_\_\_\_\_

**Roll No.** \_\_\_\_\_

**Q.1. Write the numerals-**

a) Four hundred twenty five - \_\_\_\_\_

b) Three ninety eight - \_\_\_\_\_

c) Two hundred forty five - \_\_\_\_\_

d) Three hundred fifty one - \_\_\_\_\_

e) One hundred ninety nine - \_\_\_\_\_

**Q.2. Write the number names-**

a) 430 - \_\_\_\_\_

b) 293- \_\_\_\_\_

c) 557- \_\_\_\_\_

d) 364- \_\_\_\_\_

e) 158- \_\_\_\_\_

**Q.3. Fill in the blanks-**

a) 50 \_\_\_\_\_ 70 \_\_\_\_\_ 90 \_\_\_\_\_

b) \_\_\_\_\_ 276 \_\_\_\_\_ 278 \_\_\_\_\_ 280 \_\_\_\_\_

c) 242 \_\_\_\_\_ 246 \_\_\_\_\_ 250 \_\_\_\_\_

d) 151 \_\_\_\_\_ 154 \_\_\_\_\_ 156 \_\_\_\_\_

e) 425 \_\_\_\_\_ 435 \_\_\_\_\_ 445 \_\_\_\_\_ 455 \_\_\_\_\_

**Q.4. Put the correct sign (>, < or =)-**

a) 222 \_\_\_\_\_ 122

d) 277 \_\_\_\_\_ 327

b) 340 \_\_\_\_\_ 510

e) 100 \_\_\_\_\_ 100

c) 360 \_\_\_\_\_ 306

f) 296 \_\_\_\_\_ 223

**Q.5.Solve-**

a)  $\begin{array}{r} \text{T} \quad \text{O} \\ 5 \quad 4 \\ + 2 \quad 7 \\ \hline \end{array}$

b)  $\begin{array}{r} \text{T} \quad \text{O} \\ 8 \quad 9 \\ + 3 \quad 6 \\ \hline \end{array}$

c)  $\begin{array}{r} \text{T} \quad \text{O} \\ 3 \quad 8 \\ + 2 \quad 1 \\ \hline \end{array}$

d)  $\begin{array}{r} \text{T} \quad \text{O} \\ 6 \quad 3 \\ - 2 \quad 5 \\ \hline \end{array}$

e)  $\begin{array}{r} \text{T} \quad \text{O} \\ 9 \quad 2 \\ - 5 \quad 8 \\ \hline \end{array}$

f)  $\begin{array}{r} \text{T} \quad \text{O} \\ 6 \quad 9 \\ - 3 \quad 7 \\ \hline \end{array}$

g)  $\begin{array}{r} \text{H} \quad \text{T} \quad \text{O} \\ 7 \quad 0 \\ \times \quad 8 \\ \hline \end{array}$

h)  $\begin{array}{r} \text{H} \quad \text{T} \quad \text{O} \\ 2 \quad 2 \\ \times \quad 9 \\ \hline \end{array}$

i)  $\begin{array}{r} \text{H} \quad \text{T} \quad \text{O} \\ 9 \quad 7 \\ \times \quad 6 \\ \hline \end{array}$

j)  $\begin{array}{r} \text{H} \quad \text{T} \quad \text{O} \\ 9 \quad 7 \\ \times \quad 4 \\ \hline \end{array}$

k)  $\begin{array}{r} \text{H} \quad \text{T} \quad \text{O} \\ 6 \quad 3 \\ \times \quad 3 \\ \hline \end{array}$

l)  $\begin{array}{r} \text{H} \quad \text{T} \quad \text{O} \\ 2 \quad 8 \\ \times \quad 5 \\ \hline \end{array}$

**Q.6.Division-**

a)  $\begin{array}{r} 4 \overline{) 16} \end{array}$

b)  $\begin{array}{r} 6 \overline{) 42} \end{array}$

c)  $\begin{array}{r} 5 \overline{) 35} \end{array}$

d)  $\begin{array}{r} 8 \overline{) 64} \end{array}$

Q =

Q =

Q =

Q =

R =

R =

R =

R =

**Q.7.What comes before , after and between-**

a) 265 \_\_\_\_\_

b) \_\_\_\_\_ 299

c) \_\_\_\_\_ 129

d) 328 \_\_\_\_\_

e) 265 \_\_\_\_\_ 267

f) 473 \_\_\_\_\_ 475

**Q.8. Fill in the missing number-**

a)  $13 + \underline{\hspace{2cm}} = 20$

d) \_\_\_\_\_ + 3 = 9

b) \_\_\_\_\_ - 7 = 5

e)  $14 - \underline{\hspace{2cm}} = 5$

c)             $\times 8 = 64$

f)  $9 \times \underline{\hspace{2cm}} = 0$

**Q.9. Write the time in words-**

a)  $2:00 =$  \_\_\_\_\_

d)  $4 : 00 =$  \_\_\_\_\_

b)  $6 : 00 =$  \_\_\_\_\_

e)  $9:00 =$  \_\_\_\_\_

c)  $1:00 =$  \_\_\_\_\_

f)  $12 : 00 =$  \_\_\_\_\_

**Q.10. Write the following in ascending and descending order-**

a) 482 , 500 , 364 , 110 , 213

Asc. \_\_\_\_\_

Dsc. \_\_\_\_\_

b) 248 , 290 , 341 , 10 , 478

Asc. \_\_\_\_\_

Dsc. \_\_\_\_\_

c) 469, 268, 168, 357, 198

Asc. \_\_\_\_\_

Dsc. \_\_\_\_\_

d) 112, 420, 319, 212, 413

Asc. \_\_\_\_\_

Dsc. \_\_\_\_\_

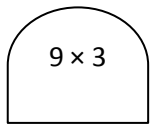
e) 83 , 99 , 394 , 500 , 297

Asc.

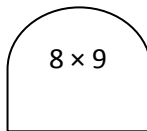
Dsc.



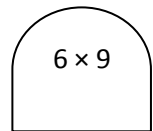
**Q.11. Choose and colour the correct answer-**



12	27	79
----	----	----



72	64	54
----	----	----



21	48	54
----	----	----

**Q.12. Draw the line segment according to the measurement given –**

- a) 3 cm –
- b) 2 inch –
- c) 14 cm –
- d) 5 inch –

**Q.13. Word Problem–**

a) Ria has 16 balloons, and her friend Sam has 14 balloons. How many balloons do they have together? If 7 balloons are burst, how many balloons are left?

--

b) There are 24 plates on the table. Each plate has 10 cupcakes. How many cupcakes are there in total?

--

कक्षा -I

दिनांक-\_\_\_\_\_

नाम - \_\_\_\_\_

रोलनंबर-\_\_\_\_\_

1. उचित संज्ञा शब्द से खाली स्थान भरें:

पेड़	मोर	मुर्गा
शेर	आम	बालक

क) \_\_\_\_\_ फलों का राजा है।

ख) जंगल में \_\_\_\_\_ दहाड़ता है।

ग) \_\_\_\_\_ सवैरे बाँग देता है।

घ) जंगल में मोर \_\_\_\_\_ नाचता है।

ड.) \_\_\_\_\_ हमें साफ हवा देते हैं।

च) बगीचे में \_\_\_\_\_ खेल रहा है।

2. एक वचन शब्दों के सामने 'एक' तथा बहुवचन शब्दों के सामने 'अनेक' लिखिए:

क) कबूतर \_\_\_\_\_ ख) चिड़ियाँ \_\_\_\_\_

ग) तारें \_\_\_\_\_ घ) किताब \_\_\_\_\_

ड.) रानियाँ \_\_\_\_\_ च) शेरनी \_\_\_\_\_

3. नीचे दिए गए अंकों को शब्दों में लिखिए:

क) २० \_\_\_\_\_ ख) १३ \_\_\_\_\_

ग) १७ \_\_\_\_\_ घ) १२ \_\_\_\_\_

ड.) ७ \_\_\_\_\_ च) १० \_\_\_\_\_

4. निम्नलिखित शब्दों के विलोम शब्द लिखिए:

क) नया \_\_\_\_\_ ख) उदय \_\_\_\_\_

ग) अमीर \_\_\_\_\_ घ) कच्चा \_\_\_\_\_

ड.) असली \_\_\_\_\_ च) वीर \_\_\_\_\_

5. दिए गए संयुक्त व्यंजन से तीन तीन शब्द लिखिए :

क) क्ष - \_\_\_\_\_

ख) त्र - \_\_\_\_\_

ग) झ - \_\_\_\_\_

घ) श्र - \_\_\_\_\_

6. चित्र देखकर 'यह' अथवा 'वह' का प्रयोग कर वाक्य बनाइए:


क)  \_\_\_\_\_

ख)  \_\_\_\_\_

ग) \_\_\_\_\_



घ) \_\_\_\_\_



7. चंद्रबिन्दु की मात्रा के पाँच शब्द लिखिए:

\_\_\_\_\_


\_\_\_\_\_

8. चित्र देखकर दिए गए मौसम के नाम लिखिए:



\_\_\_\_\_

9. चित्र को देखकर उनके बारे में पाँच पंक्तियाँ लिखिए:



1. \_\_\_\_\_

2. \_\_\_\_\_

3. \_\_\_\_\_

4. \_\_\_\_\_

5. \_\_\_\_\_

10. मेरी 'माँ' पर पाँच पंक्तियाँ लिखिए:

1. \_\_\_\_\_

2. \_\_\_\_\_

3. \_\_\_\_\_

4. \_\_\_\_\_

5. \_\_\_\_\_