

DR. VIRENDRA SWARUP EDUCATION CENTRE, JAJMAU KANPUR

Summer Holiday Homework (2024-2025)

Class - V

Vacation is the time for children to explore their myriad interests and indulge in various activities which would lead to their all-round development. Let's utilize this golden period for family reunion and reiterate family ties with your loved ones. Let's cheer for the 3R's - Rejuvenation, Relaxation and Rebonding !

General Instructions:

- All the work should be done neatly on comment sheets.
- The work of different subjects should be handed over to the respective subject teacher once the school reopens.
- Do all the worksheets given and paste it in respective subject notebooks.
- Revise all the work done till date.

Note : *The holiday homework carries marks, which will be added in the child's progress report card.*



Dr. Virendra Swarup Education Centre, Jajmau, Kanpur
SUMMER HOLIDAY HOMEWORK (2024-25)

Class: V

Subject: English

Date:

Name: _____

Roll No. _____

The English Holiday Homework comprises of 2 parts: - A Worksheet and A Task

You have to take a print out of the Worksheet and the task is to be done on A4 sheets. Both the things are to be compiled in a single file.

Task 1: Comic strip

Read the following novel:

The adventures of Tom Sawyer

Create a comic strip covering that how cleverly did Tom ends up with a whitewashed fence.

Task 2: Solve the Worksheet given below:

Q.1 Fill in the following blanks with simple present or present continuous tense.

- a) Sarah _____ (watch) a film in this moment.
- b) I _____ (study) english every day.
- c) We _____ (play) the guitar on mondays.
- d) My brother _____ (read) the newspaper now.
- e) They _____ (go) to the cinema every Saturday.
- f) Peter _____ (clean) the house in this moment.
- g) My sister _____ (speak) with her friend now.
- h) We _____ (eat) an apple every morning.

Q.2 Complete these sentences with the right adjectives from the box.

Strong	peaceful	spicy	correct	busy	dry
second	great	bright	heavy	obedient	

- a) The fire spread because of the _____ weather.
- b) My father loves to drink two cups of _____ coffee in the morning.
- c) The old man could not walk fast because of the _____ load that he carried on his back.
- d) Mumbai is a _____ city.
- e) I wish the world would be a _____ place.
- f) The _____ answer was correct.
- g) Give me _____ soup to drink.
- h) The day is _____ we can go out to play.
- i) Deepak is an _____ boy. He listens to everyone.

Q.3 Re-arrange the jumbled words into meaningful sentences:

- a) the rule/ have/ followed / we
- b) exposed / the criminals/have been
- c) The /stopped/has/working/AC
- d) scientists / our/made/ have / proud/us
- e) students/good/depend/ don't/bookish/on/knowledge
- f) the / Melbourne/is/best/to/city/live/the/in/world
- g) request/his/was/granted/at/meeting/ the
- h) thieves / the/moved/quietly/into / the building
- i) should/say/sorry/ you / for / you/what/have done

Q.4 Fill in the blanks with the correct conjunction:

- a) She is not only pretty ___ also extremely successful.
- b) He worked hard ___ he failed.
- c) Vinit is loyal ___ genuine.
- d) Either you ___ your sister has broken the glass.
- e) The cheetah ___ tiger were living in the forest.
- f) Seema is pretty ___ brilliant.
- g) I found my notebook ___ I had missed it.
- h) As soon ___ I reached the school the ball stopped ringing.
- i) He whispered in a low voice ___ nobody could hear him.
- j) He found the pen ___ he had left it.
- k) You could choose one from red ___ yellow.
- l) He was tired ___ his voice got lowered.
- m) She was searching for the lost pencils ___ pens.
- n) The books ___ pens are in the locker.
- o) The apples ___ oranges in the basket are good breakfast fruits.

Q.5 Identify the preposition from the following sentences.

- a) The cat is on the roof.
- b) I like to sit beside my best friend in class.
- c) The ball is under the table.
- d) We will have a picnic in the park.
- e) The airplane is flying above the clouds.
- f) The book is between the two shelves.
- g) Let's meet at the playground.
- h) The sun sets behind the mountains.
- i) The pen is in front of the notebook.
- j) The teacher is standing near the whiteboard.

Q.6 Choose the most appropriate word in the sentences given below.

- a) 1 My Granny was / were born in 1951, in Warsaw.
- b) 2 Yesterday, I wasn't / weren't well. Today. I'm feeling better.
- c) 3 There was / were a scary horror film on TV last night.
- d) 4 Molly and Claire wasn't / weren't at school last week.
- e) 5 It was / were very cold in my city last winter.
- f) 6 There wasn't / weren't any children at the party.

Q.7 Do as Directed.

- a) The Sun rises in the east [**Find out Subject & Predicate**]
- b) _____ much money is in your bag? [**put appropriate wh- word**]
- c) Pray to God (for/before) going to sleep. [**Pick out the correct word**]
- d) He is poor ___ he is honest. [**fill in the blanks with the linker**]
- e) Trees give us food, wood, and shelter. [**Find out conjunction**]
- f) My parents (is/are) my friends. [**Pick out the correct word**]
- g) My friend ate (a/an) apple. [**Pick out the correct word**]
- h) The boy told a lie. [**Change into present continuous tense**]
- i) The cows were eating grass. [**Change into simple present tense**]
- j) There ___ (be) tourists spot in West Bengal. [**Correct verb form**]
- k) There is a vase _ (in/on) the table. [**Fill in the blanks**]
- l) This is exactly I want to know. [**Pick out adverb**]
- m) My house is close to _ (your/yours) [**Pick out the correct alternative**]
- n) You know _ man who helped you. [**Fill in the blanks**]
- o) The man died ___ cancer. [**fill in the blanks with preposition**]
- p) The boys _ (enjoy/enjoyed) the football match yesterday. [**Correct verb form**]
- q) Rohit Sharma is the captain in the match. [**Pick out the Proper Noun**]

1. सही वाक्य पर (✓) और गलत वाक्य पर (X) का निशान लगाइए -

- क. अखबार मौखिक भाषा का रूप है। ()
- ख. भारत में प्रत्येक वर्ष 14 सितंबर को हिंदी दिवस मनाया जाता है। ()
- ग. भाषा के लिखित रूप को लिपि कहते हैं। ()
- घ. भाषा के दो रूप होते हैं ()
- ड. बंगाल में तमिल बोली जाती हैं। ()

2. मौखिक भाषा लिखित भाषा के पाँच-पाँच उदाहरण लिखिए -

मौखिक भाषा

लिखित भाषा

- क. _____ क. _____
- ख. _____ ख. _____
- ग. _____ ग. _____
- घ. _____ घ. _____
- ड. _____ ड. _____

3. नीचे दिए गए वाक्यों में शब्दों को सही क्रम में लगाकर उचित वाक्य बनाइए -

- क. रहा है केला खा बंदर। क. _____
- ख. राष्ट्रभाषा है हिंदी हमारी। ख. _____
- ग. रहा मोर है नाच पर होने वर्षा। ग. _____
- घ. उड़ रही है चिड़िया आसमान में। घ. _____
- ड. कक्षा में हैं रही पढ़ा अध्यापिका। ड. _____

4. उचित संज्ञा शब्दों द्वारा रिक्त स्थान की पूर्ति करिए -

- क. मेरे देश का नाम _____ है।
- ख. _____ जंगल का राजा कहलाता है।
- ग. आज बहुत _____ है।
- घ. _____ आगरा में है।

5. दिए गए मुहावरों के नीचे रेखा खींच कर उनका अर्थ भी लिखिए –

क. पुस्तक माँगने पर अमित ने रोहित को अँगूठा दिखा दिया।

अर्थ – _____

ख. सरकारी नौकरी लगने पर अक्षय फूला नहीं समा रहा था।

अर्थ – _____

ग. कक्षा में बच्चों ने आसमान सिर पर उठा रखा था।

अर्थ – _____

6. निम्नलिखित शब्दों के वचन बदलकर लिखिए –

का

ग. मक्खी – _____

घ. वधुएँ – _____

ड. माला – _____

च. जूता – _____

7. अपने विद्यालय के वार्षिकोत्सव के बारे में बताते हुए दादी जी को पत्र लिखिए ।


8. मित्र को कक्षा में प्रथम आने की बधाई देते हुए पत्र लिखिए ।

9. दिए गए विषय पर अनुच्छेद लिखिए –

क. वर्षा में भीगना

ख. स्वतंत्रता दिवस

10. नीचे दिए गए चित्र को देखकर उसका वर्णन अपने शब्दों में कीजिए ।



नोट- प्रश्न – 7, 8, 9, 10 का उत्तर अपनी हिंदी भाषा की नोटबुक में करना है।

Subject - Mathematics

Class : V

Name: _____ **Roll No.:** _____

Q1. Write the number names of the following keeping periods in mind:

- a) 203,765,890
- b) 54,76,089
- c) 316,750,456
- d) 3,67,08,407

Q2. Write the place value and the face value of the underlined digit:

- a) 490,567,321
- b) 4,67,56,432
- c) 308,234,567
- d) 45,78,78,540

Q3. Simplify the following:

- a) $23,67,865 + 3,67,54,709 - 54,78,650$
- b) $23,86,654 - 17,86,098 + 34,76,543$
- c) $45,80,654 \times 344$
- d) $6,854 \times 962$

Q4. Divide the following:

- a) 54,78,654 by 842
- b) 45,87,235 by 437

Q5. Fill in the blanks.

- a) $XIV = 10 + \underline{\quad} = \underline{\quad}$
- b) $CCXXIX = \underline{\quad} + 20 + \underline{\quad} = \underline{\quad}$
- c) $CXLVIII = \underline{\quad} + \underline{\quad} + \underline{\quad} = \underline{\quad}$
- d) $CDLII = 500 - \underline{\quad} + \underline{\quad} + \underline{\quad} = \underline{\quad}$

Q6. Write the following Roman Numerals in the Hindu Arabic system.

- a) CDLXXX (b) CMXXII (c) DXLVIII (d) CCLVI e) DCXCVIII
- (f) CXXXV (g) DCCLIX (h) MCCCXXV i) MCMLXXXI (j) CDXCII

Q7. Give the corresponding Roman numerals.

- a) 542 (b) 903 (c) 129 (d) 719 e) 297
- (f) 205 (g) 646 (h) 892 (i) 41 (j) 3280

Q8. Add the following.

- a) XXVI + X b) LX + XI
c) XXXIII + II d) XII + XII

Q9. Subtract the following.

- a) XXIX - XIV b) LXIV - III
c) XXX - XXIII d) L - II

Q10. Subtract the following and check the answer:

- a) 45,87,457 - 29,79,653
b) Subtract 2,09,608 from 4,70,980

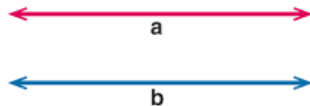
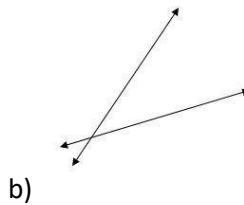
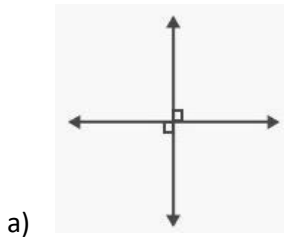
Q11. Arrange the following numbers in descending order:

- a) 56,98,64,753 ; 45,87,52,974 ; 56,99,45,708
b) 60,98,578 ; 60,98,758 ; 60,89,857

Q12. Word Problems:

- a) The factory produced 4,87,78,854 cartons in March and 7,78,68,098 cartons in April. How many total cartons does the factory produce in the two months?
- b) The sum of two numbers is 4,07,65,587. If one of them is 45,09,678, find the other number.
- c) The population of a village is 6,34,64,467 of which 3,75,85,467 are men and 1,97,08,764 are women and the rest are children. How many children are there?
- d) A refrigerator costs ₹ 42095. How much would 237 such refrigerators cost?
- e) A number when divided by 27 gives 186 as a quotient. Find the number.
- f) What is the product of the greatest 6 - digit number and the smallest 4 - digit number?
- g) 12000 ml of cold drink is to be poured equally into 40 glasses. How much cold drink will be poured in each glass?

Q13. Classify the lines shown below as parallel, intersecting or perpendicular lines



c)

Q14. Case Based

Ankita was given the digit 0, 7, 3, 5, 8 and 9. She was asked to form the smallest 7- digit number by repeating one digit. Rama was given the same digits and was asked to form the greatest 7- digit number by repeating one digit.

Based on the given data, answer the following questions:

- What is the number formed by Ankita?
- What is the number formed by Rama?
- Write both the numbers in expanded form.
- What would be the difference between the numbers formed by Ankita and Rama?

Q15. Case Based

Given below are the land areas of the four largest countries of the world. Study the list and answer the questions below.

Country	Approximate area in Sq. Km.
China	95,96,960
USA	96,29,091
Russia	1,70,75,200
Canada	99,84,670

- Which is the largest country in the above table?

- b) What is the difference between the largest and the smallest country in the above table?
- c) What is the place value and face value of the digit 8 in the area of Canada
- d) What is the area of the smallest country in the above table?

Math Project

Math and sports

- **Objective: to explore the role of Math in sports.**
- **Tasks:**
 1. **Select a sport (example- cricket, football, or basketball).**
 2. **Gather data on a specific aspect of the sport (example- scores, player statistics, distances run).**
 3. **Use this data to create graphs and charts.**
 4. **Write a brief report on how math is used in analyzing and improving performance in sports.**

SUBJECT - SCIENCE

- Make a single page project of MS Swaminathan and his contributions to science and agriculture (coloured sheet of paper)
- Collect three flowers dry and paste them on coloured sheets. Identify and label their parts.
- “kitchen Garden” science experiment
Grow vegetables like coriander, onion and cabbage from the leftover tops or roots Record your observations in a table on a coloured sheet of paper

SUBJECT -SOCIAL SCIENCE

Prepare a flipbook on important discoveries and inventions in the **field of medicines (Any 5 around the world)**. Collect information and paste pictures of devices and machines developed in the field of medical science. Describe in your words how the above-mentioned inventions have created impact in our lives.

1. Prepare a **3D Map of your neighbourhood**. Use different symbols and signs to show the areas nearby like schools, hospitals and other important landmarks.

SUBJECT - COMPUTER

PowerPoint Presentation

Make a PPT on the topic "The Internet". which includes do's and dont's while using the internet, where do you use internet and latest AI (artificial intelligence) inventions. Be Creative

SUBJECT – GENERAL KNOWLEDGE

Holiday around the World Scrapbook

- Objective: Create a scrapbook detailing how different holidays are celebrated in various countries.
- Material: scrapbook, paper, markers, glue, printed images.
- Instructions:
 1. Research different holidays celebrated around the world.
 2. Write brief descriptions and include pictures or drawings for each holiday.
 3. Organize the information into a scrapbook with sections for each country or holiday.Note: Select 5 countries of your choice.